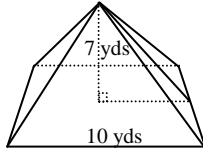


Volume of Pyramids
MATHguide.com

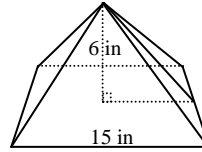
Name: _____

Calculate the volume of these pyramids.

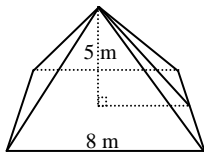
1)



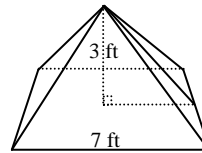
2)



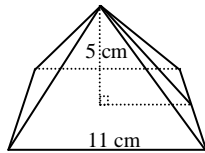
3)



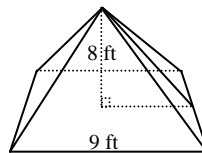
4)



5)



6)

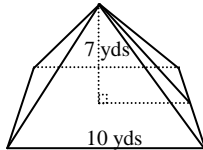


Volume of Pyramids
MATHguide.com

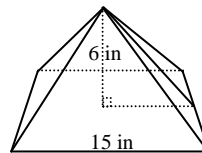
Name: _____

Calculate the volume of these pyramids.

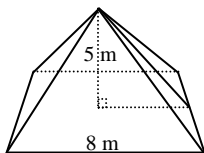
1)



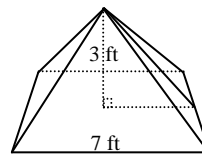
2)



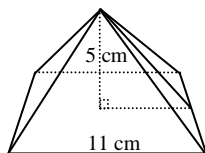
3)



4)



5)



6)

